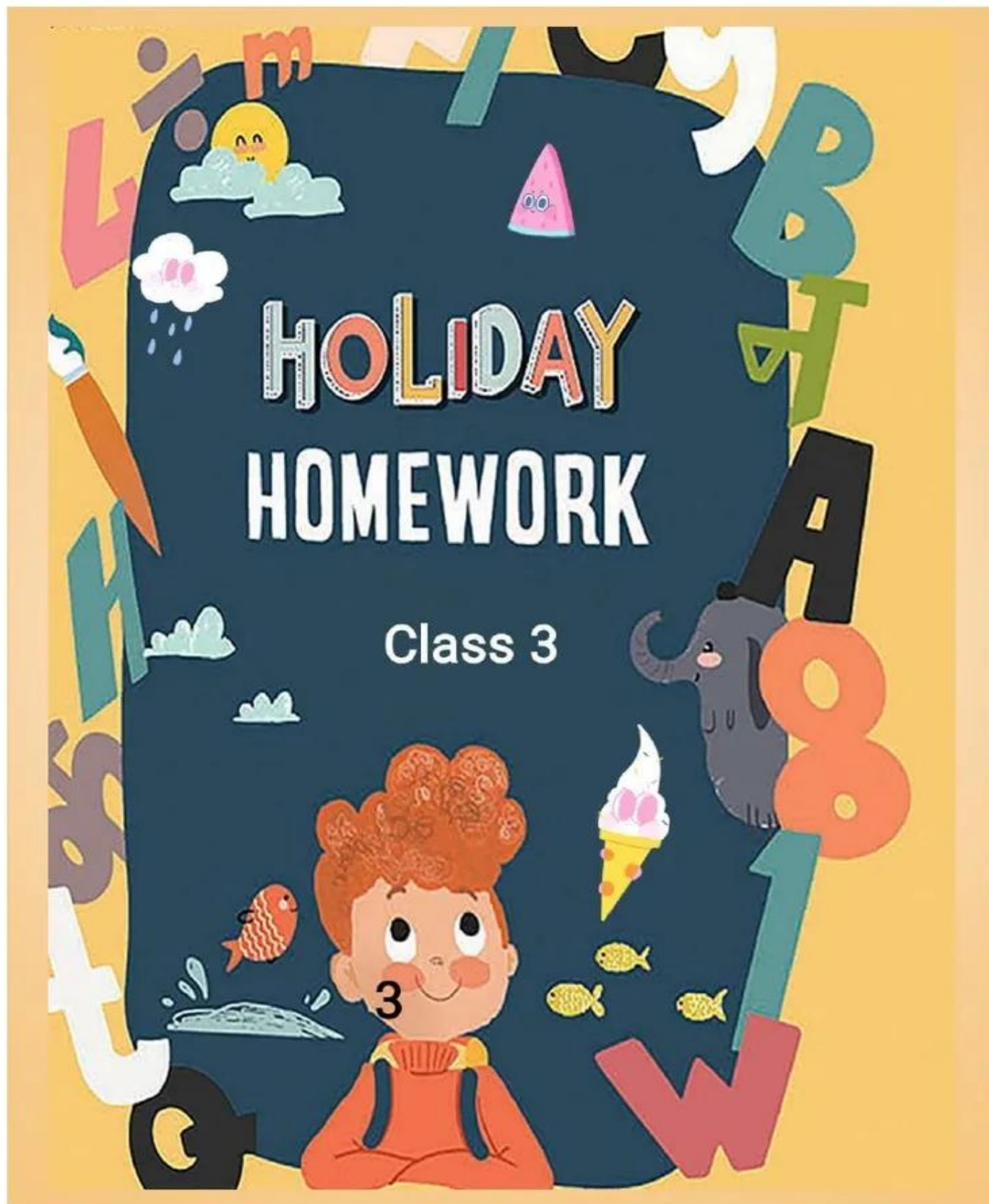


NAV JEEWAN MODEL SCHOOL

WZ-IIIA BLOCK VISHNU GARDEN NEW DELHI-110018



NAV JEEWAN MODEL SCHOOL

ENGLISH

Dear students utilize the time smartly by: -

1. Study well
2. Read books
3. Help parents in household
4. Engage yourself in hobby
5. Play games
6. Revise all the UT syllabus

Activity Time: -

1. Write five describing words showing facial expression paste their picture in A3 sheet and write the expression shown.
2. Paste 5 pictures of each singular nouns and plural nouns on chart and name them.
3. Make a word train of 10 words and also paste suitable pictures in scrapbook
4. Write and paste any 5 common nouns and proper nouns in A-4 sheet.

Listening Time: -

1. <https://youtu.be/aJNqJXZ9s90?feature=shared>
2. <https://youtu.be/kAo4-2UzgPo?feature=shared>


Conversation Time: -

1. <https://youtu.be/8irSFvoyLHQ?feature=shared>

Reading Time: -

Read the stories given below in front of your family.

RAINBOW FISH TO THE RESCUE



A long way out in the deep blue sea there was a school of fish. Each of them had a sparkling silver scale a gift from the Rainbow Fish. One day a little striped fish appeared. "Can I play with you?" he asked. "No,"

said the fish with jagged fins. "You need a shiny scale to play flash-tag and you don't have one."

Rainbow Fish felt sorry for the little striped fish, but he didn't want to lose his new friends, so he didn't say anything. He just swam off with the others.

The little striped fish was left all alone.

Rainbow Fish remembered how he had felt when he had no friends. "That little striped fish must feel very sad and lonely," he thought. Suddenly, a shark shot into the middle of the school of fish. Rainbow Fish and his friends raced to hide in a crack in the reef where the shark could not reach them. They were safe. But the little striped fish wasn't

Rainbow Fish was very worried "The little striped fish is out there all alone," said Rainbow Fish. "We have to help him!"

With that, Rainbow Fish left the safety of the reef. "Let's go!" he called the other fish trembled with fear, but they knew what they had to do. They sped out of the crack after Rainbow Fish and swarmed around the shark, making him quite dizzy.

Rainbow Fish led the little striped fish to safety.

"Thanks for saving me," said the little striped fish.

When the other fish returned to the reef, they asked the little striped fish to play with them.

"But I don't have a shiny scale," said the little striped fish.

"We can play fin-tag instead," said the other fish, and then they all swam off together, playing happily in the deep blue sea.

Reading-comprehension

The two FROGS.



Once two frogs played near a pot of cream. They decided to look into the pot and fell into it. They couldn't get out of the pot. So they swam round and round in the cream.

swam round

One of them is afraid and said:

- Oh, this is the end of my life!"
- It stopped swimming and sank.

But the second frog is brave and clever. He swam and swam and beat the cream with its little feet. The cream became a ball of butter. The frog jumped on the ball of butter and got out of the pot!!!



Answer the questions:

1. What is the moral of this tale?
2. Do you always overcome the problems?
3. What is the second frog like? Describe in 3 adjectives.
4. What would you recommend people who are in trouble?

1. Go to the library. Reading story books enhance language and vocabulary and write down new words in your assignment copy. Make a habit of reading one story every day.

2. Read assignment (Read the passage and answer the questions)

All the children in the colony are happy. They are getting a new playground. There is tall ladder and a slide to slide down. Under the slide is a tunnel to crawl through.

There is also swimming bridge to go across from one side to another. There are monkey bars for children.

There are 4 swings it takes the children high up in the air and two see-saws. There are so many things to do in this new playground. All the children are happy and they are getting a new playground.

Questions: -

- How many swings in the park?
- Why are the children in the colony happy
- Write opposite of up _____ and short _____

3. Writing Time: -

1. Do 25 pages writing in holiday homework notebook.
2. Read about any one leader you like and write five sentences what do you like in that leader.
3. Read and write the story (the dishonest hand) in holiday homework notebook.
4. Do the worksheets given below.



Singular & Plural Nouns

Name: _____ Date: _____

Convert each singular noun to plural, and each plural noun to singular.

(1) power	_____	(20) beach	_____
(2) dragon	_____	(21) staple	_____
(3) file	_____	(22) trench	_____
(4) charm	_____	(23) penny	_____
(5) whiteboard	_____	(24) company	_____
(6) wish	_____	(25) dinner	_____
(7) empty	_____	(26) gallery	_____
(8) fax	_____	(27) girl	_____
(9) daisy	_____	(28) sky	_____
(10) disc	_____	(29) gas	_____
(11) phone	_____	(30) library	_____
(12) spy	_____	(31) atrocity	_____
(13) key	_____	(32) keyboard	_____
(14) enemy	_____	(33) party	_____
(15) reality	_____	(34) club	_____
(16) critic	_____	(35) lunch	_____
(17) backpack	_____	(36) match	_____
(18) fox	_____	(37) bush	_____
(19) apostrophe	_____	(38) branch	_____

NAV JEEWAN MODEL SCHOOL

HINDI

1. 20 पेज सुलेख लिखें।
2. कक्षा में हिंदी पाठमाला और हिंदी व्याकरण के कराएं सभी कार्य याद करें।
3. पशु पक्षियों के चित्र प्रोजेक्ट फाइल में चिपकाए।
4. तिरंगा का चित्र बनाएं और उसके बारे में पांच पंक्तियां लिखें।
5. स्वर और व्यंजन का चार्ट बनाएं।
6. मेरा विद्यालय पर अनुच्छेद लिखें।

वर्कशीट- 1

क. इनकी भाषाएं बताएं:-

१. रेडियो सुनना
2. फोन पर बात करना
3. अखबार पढ़ना।
4. ईमेल करना
5. भाषण करना
6. मैसेज पढ़ना

वर्कशीट -2

1 खाली स्थान में वर्ग का पहला, तीसरा व आखिरी वर्ण लिखो :-

—	थ	—	ध	—
—	ख	—	घ	—
—	फ	—	भ	—
—	छ	—	झ	—

2 स्वर और व्यंजन को छोट कर अलग करो और उन्हें कम से लगाओ:-



इ	ख			
च	ओ			
व	अं	य	घ	ण
थ	ड	ए	प	झ
आ	उ	छ	ऊ	ध
न	ट	ब		



वर्कशीट- 4

1. शब्द किनके मेल से बनते हैं।

क वाक्यों के ख। वर्णों के ग। स्वरों के

2. 'अमृता पानी पीती है' में उद्देश्य बताएं।

क। पानी ख। अमृता ग। दोनों

3. आगत स्वर वाला शब्द है।

क। दांत ख। चाक ग। चांदनी।

4. वर्ण कितने प्रकार के होते हैं

क। चार ख। दो ग। दस

5. पंजाब में कौन सी भाषा बोली जाती है।

क। पंजाबी ख। कन्नड़ ग। मराठी

१. सही (✓) या गलत (X) का निशान लगाइए -

(क) हिंदी भाषा की लिपि रोमन है। ()

(ख) भाषा के दो रूप होते हैं। ()

(ग) संसार में सभी एक ही भाषा बोलते हैं। ()

(घ) कर्नाटक में कन्नड़ भाषा बोली जाती है। ()

(ङ) ई-मेल भाषा का लिखित रूप है। ()

२. भारत में बोली जाने वाली भाषाओं के नाम लिखिए-

(i) ----- रा ठी (ii) पं ----- (iii) हि ----- (iv) त ----- ल (v) गु ----- रा -----

३. उचित शब्दों से खाली स्थान भरिए -

लिखित , रोमन, लिपि, १४ सितम्बर , कश्मीरी , मौखिक

NAV JEEWAN MODEL SCHOOL

SCIENCE

1. "Save and Conserve Water."

a. Make a poster (A3 size) on "How to Save Water."

b. Get a "Water Pledge" signed by at least 10 people in your colony / locality.

c. Paste at least two photographs of your campaign on the poster.

2. Our planet now faces a global extinction crisis never witnessed by humankind. Scientists predict that more than 1 million species are on track for extinction in the coming decades.

Search 3 animals and 3 plants which are threatened with extinction and write the reason of extinction.

Refer: <https://youtu.be/-JP-zoBLyWE>

<https://youtu.be/Tbp9AyitsJ8>

<https://youtu.be/tyJU4e5Tyjo>

3. Unsung heroes of the Everest

Watch the video:








<https://youtu.be/CtbQgLluFyg>

<https://youtu.be/A6pLn400M0>

Write a short note on the Unsung heroes of the Everest in scrapbook and paste picture also after watching the video.

4. Revise the chapters "Living and Non-Living Thing" and "Human Body"

5. Do the worksheets given below

Name: _____ Class: _____	
Organ of Human Body	
Write the name of each organ in the Names column	
Organs	Names
	
	a b
	
	
	
	
	

SUBJECT – SCIENCE

Topic: Living and non-living things

NAME: _____

DATE: _____

Q 1. Fill in the blanks:

- a) Insects take in air through _____.
- b) _____ move in search of food and water.
- c) _____ make their own food.
- d) Most plants grow from _____.
- e) Plants _____ to stimuli.

Q 2. Answer in one word.

- a) Anything that causes a response in a living thing _____
- b) A plant which closes its leaves when touched _____
- c) The time period for which a living thing lives _____
- d) The part where stomata are present _____
- e) The part through which fish breathe _____

Q 3. Tick (✓) the true statements and cross (X) the false ones.

- a) Animals produce their own food. ☐
- b) Non-living things need air. ☐
- c) Plants respond to stimuli. ☐
- d) A sunflower does not show any movement. ☐

Human Body



1. Fill in the blanks

- a. _____ is the smallest unit of our body.
- b. There are _____ organ in our body.
- c. Kidney removes _____ from our body.
- d. _____ organ pumps blood to different parts of the body.

2. Match the organ to the system it belongs.



Digestive system

Excretory system

Nervous system

Respiratory system

3. Circle the odd one out.

- a. ears nose heart skin
- b. blood nerves heart circulation
- c. kidney urine brain sweat

4. Define

- a. cell

NAV JEEWAN MODEL SCHOOL

SOCIAL SCIENCE

1. Make a poster on save environment.
2. Write a paragraph about pollution in India.
3. Make a first aid kit.
4. Write state and their capital on A-4 size sheet.

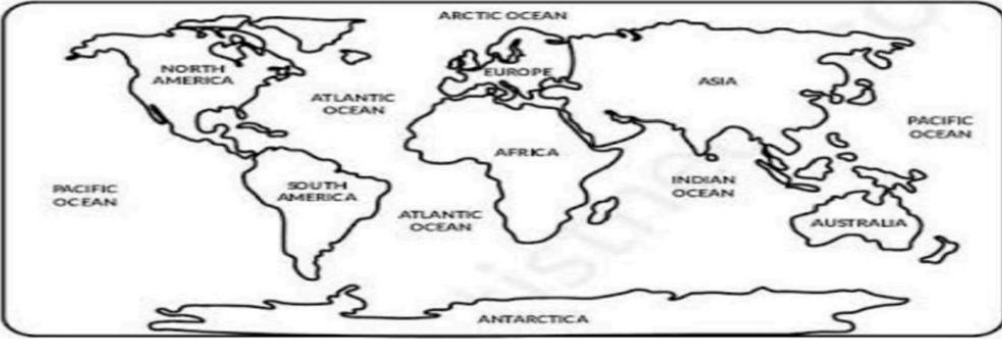
Abide road safety rules
By MS. NAVA

Instruction: Match the pictures to the safety rule signs correctly.

	•	
	•	
	•	
	•	
	•	

5. State true and false against the statement.

World Map
Read the question and check true or false












	True	False
1) I can see Antarctica on a world map.	<input type="checkbox"/>	<input type="checkbox"/>
2) Pacific ocean is located on a world map.	<input type="checkbox"/>	<input type="checkbox"/>
3) I can see the state of Florida on a world map.	<input type="checkbox"/>	<input type="checkbox"/>
4) A world map shows local streets.	<input type="checkbox"/>	<input type="checkbox"/>
5) I can not see Africa on a world map.	<input type="checkbox"/>	<input type="checkbox"/>

6. Make a model of earth.

Name _____

Can you write the names of all 9 planets? _____

	Mercury	_____
	Venus	_____
	Earth	_____
	Mars	_____
	Jupiter	_____
	Saturn	_____
	Uranus	_____
	Neptune	_____
	Pluto	_____

7. Write about your favorite leader on A3 sheet with pictures.

8. Mark all the state on the map of India.




9. Collect information about the union territory “Andaman and Nicobar Island” under the given subheading make a project file using relevant picture and illustration.

- A. Climate and location
- B. Plant and animal life
- C. Transport and communication
- D. Life of people
- E. Tourism

10. Make a pamphlet on the topic child labour.

11. Picture study

Look at the picture and answer the questions that follow.



1. What do you call this helper?

2. What does this helper do?

3. Can everyone do what this helper does?

We Are Equal

1. Paste pictures of famous male and female personalities who works in the same field.
2. Professions given below -:
 - Air force (for example male – wing commander Abhinandan Varthaman and female -wing commander Vyomika Singh). Paste the picture of given person.
 - Chef
 - Cricketer
 - Fashion designer
 - Astronaut
 - Boxer
 - Badminton player
3. Write words around the pictures (like: equal, respect, kindness.)
4. Write a short message at the bottom on Gender Equality.

(Note: - Do this activity in your activity file.)

NAV JEEWAN MODEL SCHOOL

MATHS

Q.1 Make a scrapbook and do the following activities in it: -

1. Collect registration numbers of any 10 cars in your locality.

(A) Write numbers in words

(B) Write the number in expanded form

©. Arrange the numbers in place value table

(D). Find the face value of all cars number


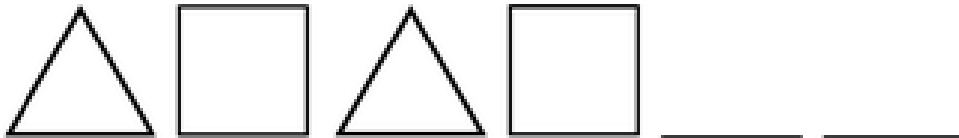
(E). Arrange the number in ascending and descending order

Q.2 paste worksheet in notebook.

10 10 10 10 10 10

10 10 10 10 10 10

Complete the Patterns



Q.3 Draw or paste picture of flags from any 4 countries the flag should be divided into 3 or 4 equal parts, write down the fraction of each colour in the flag.

Q.4 complete abacus worksheet.

Grade: 3
Subject : Abacus Math

theOpenBook.in

Write the numbers formed by each abacus

Copyright © theOpenBook.in. All rights reserved

Q.5 complete worksheet.



Digital to Analogue

(Y2) Read the time to the half or quarter hour on a 12-hour digital clock

Name _____



5:45



4:30



6:15



1:30



3:30



4:15



3:15



4:45



4:45

Q.6 learns and writes 2 to 20 tables in notebook.

Q.7 Make a hut by use of different shape of cardboard.

Q.8 Addition: -

ADDITION WORKSHEETS FOR GRADE 3

All these questions involve finding the missing addend for these sums. All the missing addends are a number from 1 to 9

1 $47 + \square = 51$

2 $22 + \square = 27$

3 $34 + \square = 41$

4 $54 + \square = 62$

5 $37 + \square = 40$

6 $78 + \square = 82$

9 $\square + 29 = 34$

10 $\square + 44 = 48$

11 $\square + 62 = 67$

12 $\square + 17 = 22$

13 $\square + 83 = 89$

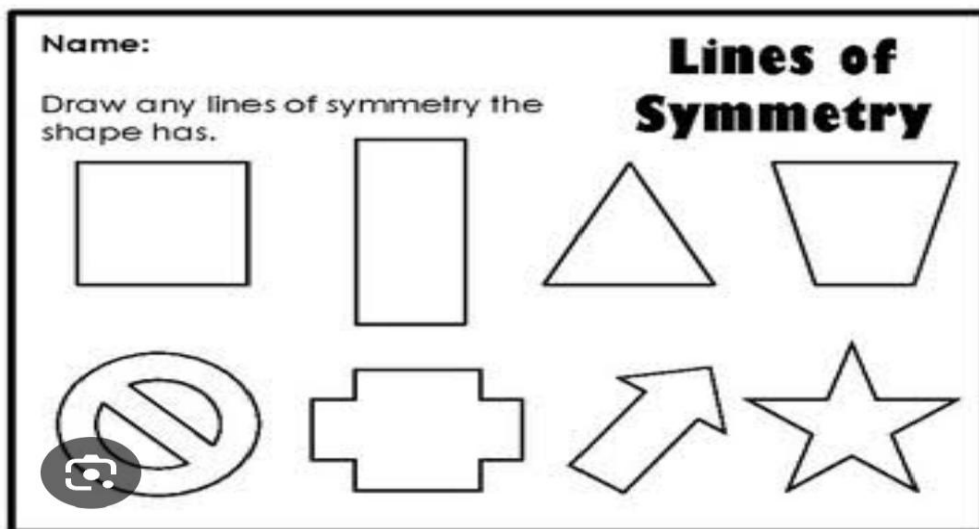
14 $\square + 37 = 43$

Q.9 Make a list of the height and weight of your family members.

Q.10 Paste the pictures of currency of any 10 countries in your notebook

Or

Paste worksheet of symmetry



Q.11 Do practice of chapter 1 and 2 for unit test.

NAV JEEWAN MODEL SCHOOL

GK

1. Collect 5 different types of medicinal leaves, dry them (keeping in newspapers for 4-5 days), paste them in scrap book and write their uses neatly [Leaves of Tulsi, neem, bay, curry, eucalyptus can be used].
2. Write 2 current affairs daily
3. Make a chart on our national symbols paste pictures also
4. Search and collect information about any one great Indian leader and write about him/her on A-3 sheet paste picture also.
5. Draw / paste pictures of dresses of India in scrapbook write name also Pocket thank you for that play
6. Do the worksheet given below



FAMOUS LANDMARKS

Name: _____

Section: 1st

1. Match the landmarks to each name.



1. Sydney Opera House
2. Big Ben
3. Chichen Itza
4. Statue of Liberty
5. Pyramids of Giza
6. Great Wall of China
7. Machu Picchu
8. Eiffel Tower
9. Christ the Redeemer
10. Stonehenge

NAV JEEWAN MODEL SCHOOL

DRAWING

Q.1 Make a colour wheel.

A. Draw any fruit by using primary colours

B. Draw a bird by using tertiary colours.

Q.2 Take an old newspaper and make a giraffe on it cut out the image and use sketch pen to make black spots.

Q.3 Make a Father's Day card.

Q.4 Make a pencil stand.

Q.5 Make a lippan art wheel.

Q.6 Make a wall hanging.



